

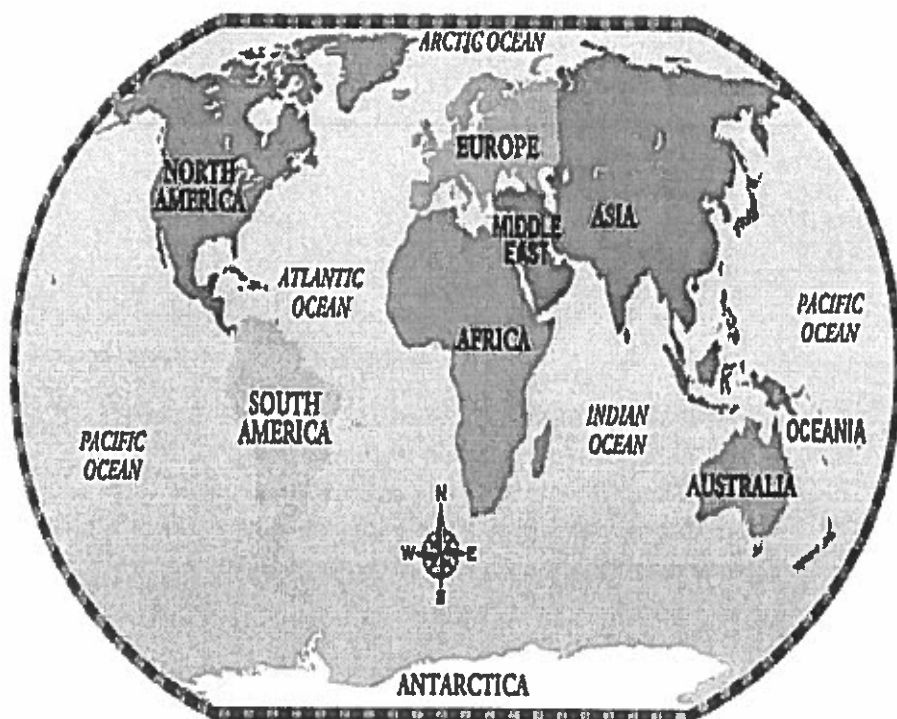
Name: \_\_\_\_\_ Date: \_\_\_\_\_ Period \_\_\_\_\_



# Daily Warm-Ups

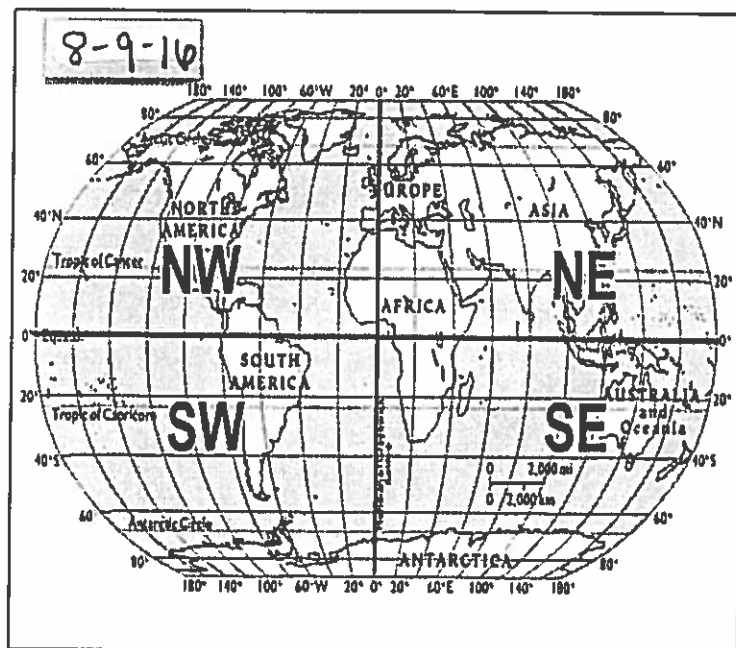
Directions: Complete all of the activities on the day that they are assigned, please do not work ahead. If you complete the assignments before the assigned date, you may receive a zero.

8-8-16



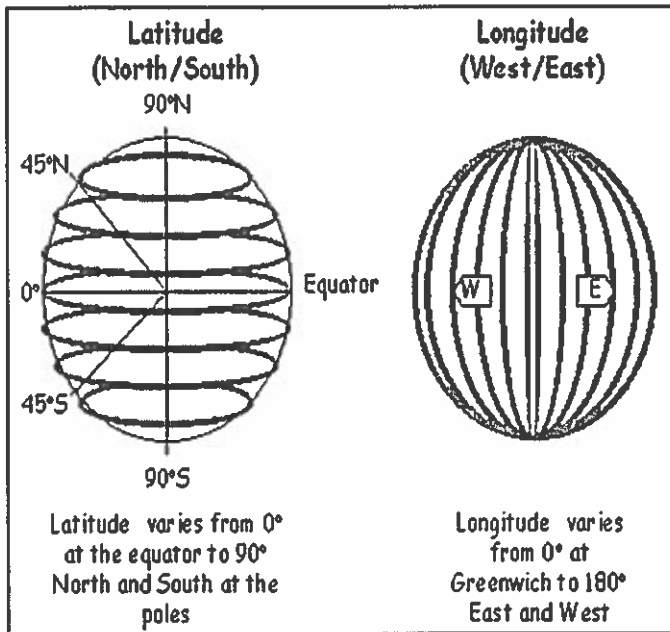
1. How many continents are located in the world?
2. Name the continents.
3. How many oceans are located in the world?
4. Name the oceans.
5. Which oceans border North America?

8-9-16



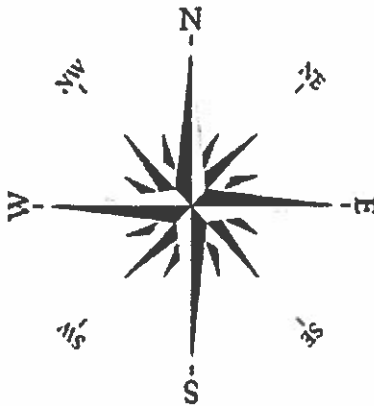
1. How many hemispheres can the earth be divided into?
2. What are the hemispheres?
3. What imaginary line divides the eastern and western hemispheres?
4. What imaginary line divides the northern and southern hemispheres?

8-10-16



1. Based on the information provided in this chart, define latitude & longitude lines in your OWN words.
2. How are latitude and longitude lines measured?
3. Are latitude and longitude lines real or imaginary?
4. How high in degrees do latitude lines go? Longitude lines?

8-11-16



1. What is this symbol called?
2. What purpose does this symbol serve?
3. What are the cardinal directions?
4. What are the intermediate directions?
5. How was this symbol used in history?

8-12-16



1. In what direction would a person travel from Finland to Spain?
2. In what direction would a person travel from Romania to Russia?
3. Give the relative location of Germany and United Kingdom?